



Nupiešk trūkstamus paveikslėlius.



Rask 5 skirtumus.




Surask ir sujunk vienodas mergaites.




Apvesk teisingą šešėlį.






Nupiešk trūkstantus paveikslėlius.



Išbrauk čia netinkantį paveikslėlį.



Apvesk teisingą šešėlį.




Kiekvienam piešinėliui priskirk teisingą šešėlį.







Sujunk taškus ir pabaik piešinį.



Nuspalvink pagal skaičius.



- 
 1. Geltona
- 
 2. Raudona
- 
 3. Žalia
- 
 4. Mėlyna
- 
 5. Rožinė



Atlik atimties veiksmą ir įrašyk atsakymą.



-



=



Nuspalvink.



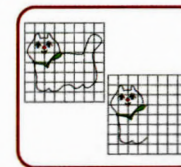
$$\begin{array}{c}
 \text{🍬} + \text{🍬} + \text{🍬} \\
 = \underline{\quad\quad}
 \end{array}$$

Atlik atimties ir sudėties veiksmus ir įrašyk atsakymus.

A subtraction problem using pink heart-shaped candies. The first box contains 6 candies arranged in two columns of three. A minus sign is between the boxes. The second box contains 4 candies arranged in two rows of two. An equals sign follows, leading to a large empty circle for the answer.

An addition problem using orange and yellow butterflies. The first box contains 4 butterflies in two rows of two. A plus sign is between the boxes. The second box contains 2 butterflies in two rows of one. An equals sign follows, leading to a large empty circle for the answer.

An addition problem using green 'Cute lit' candies. The first box contains 5 candies in a scattered arrangement. A plus sign is between the boxes. The second box contains 3 candies in a scattered arrangement. An equals sign follows, leading to a large empty circle for the answer.



Pasinaudodama langeliais pabaik piešinį.

A drawing activity on a grid. The left part shows a dotted outline of a swan's head and neck. The right part shows a dotted outline of a wing, with the rest of the grid left blank for completion.



Sujunk taškus ir pabaik piešinį.

A dot-marker drawing activity. A large butterfly shape is formed by a series of dots. The drawing is set against a background of roses and green leaves.

$$\begin{array}{c}
 \text{🍬} + \text{🍬} + \text{🍬} \\
 = \underline{\quad\quad}
 \end{array}$$

Atlik sudėties veiksmą ir įrašyk atsakymą.

An addition problem using heart-shaped candies with a cross pattern. The first box contains 6 candies in two columns of three. A plus sign is between the boxes. The second box contains 3 candies in two rows of two. An equals sign follows, leading to a large empty circle for the answer.